

Chemistry 2541, Fall 2015

Quiz 5

(30 points)

Key

Important notes:

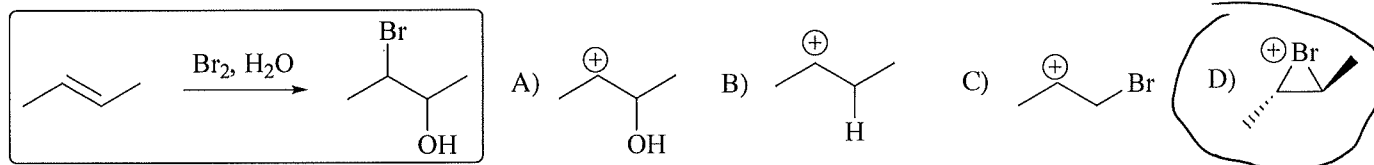
- Please use the provided Scantron form for your answers; you can keep the sheet with the questions and can use it as scratch paper
- Do not forget to write your name on the Scantron form
- You will not receive credit for unmarked answers or for more than one mark on answer line
- Your scores will be posted on eGradebook; graded Scantron forms will not be returned to students.

Questions 1-10: Please mark the appropriate box on the front of the Scantron form (3 pts each).

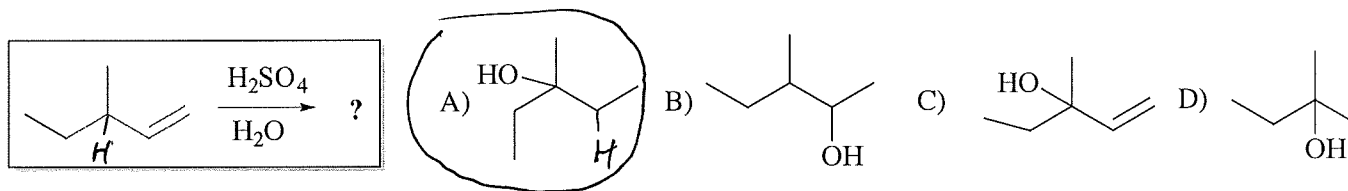
1. Which of the following is the **least stable carbocation**?



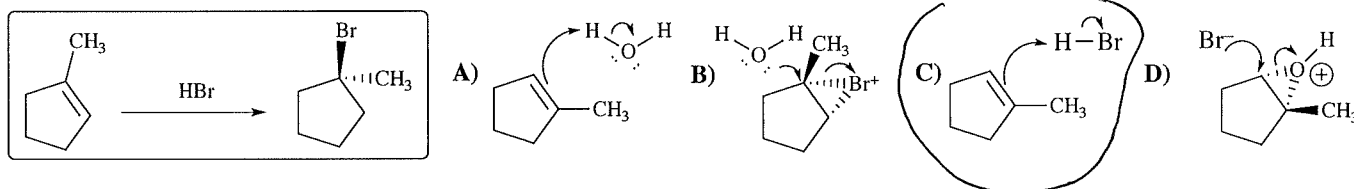
2. What is the structure of the reaction **intermediate** for the reaction in the box?



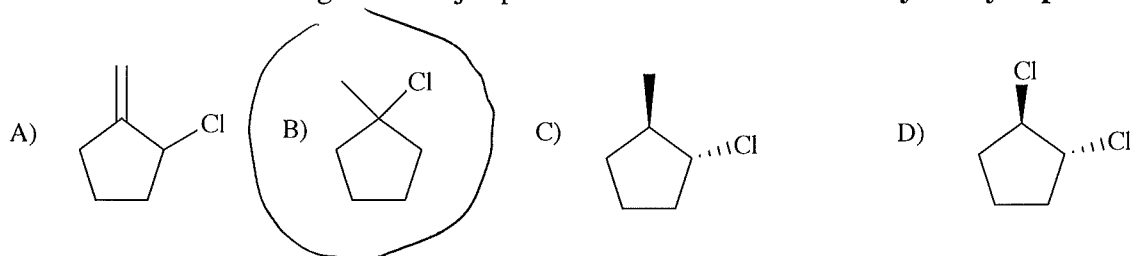
3. What is the product of **1,2-hydride shift** for the reaction in the box?



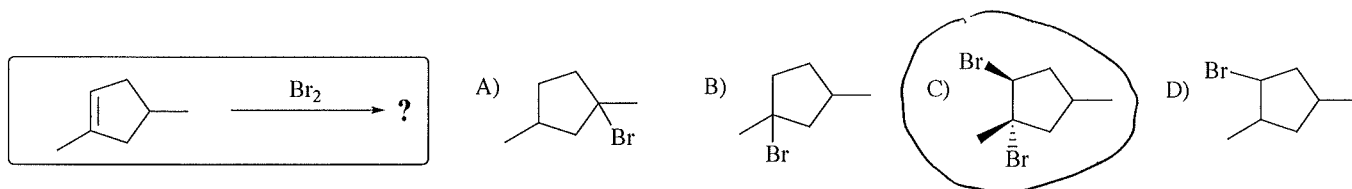
4. Which one of the following four schemes (A-D) represents a **step** in the **mechanism** of the reaction in the box?



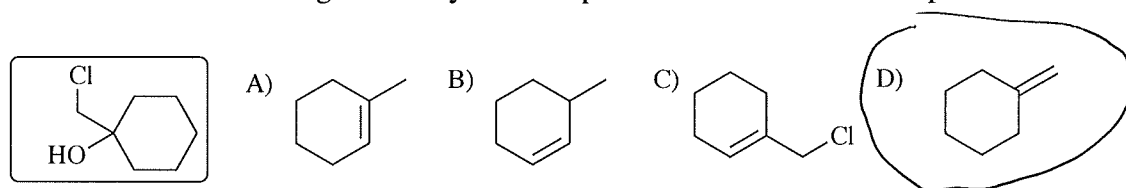
5. Which of the following is the major product of the reaction of **methylenecyclopentane** with **HCl**?



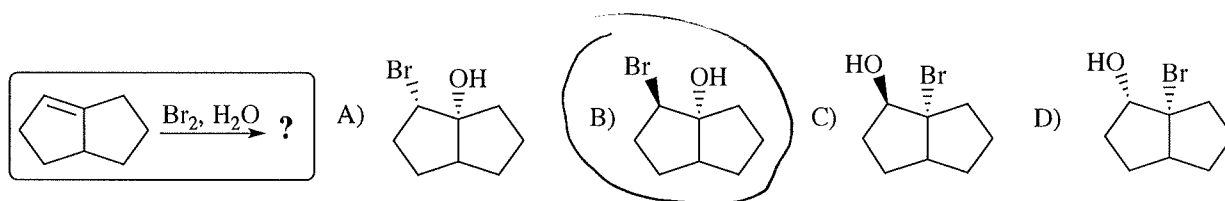
6. What is the **main product** of the reaction shown in the box?



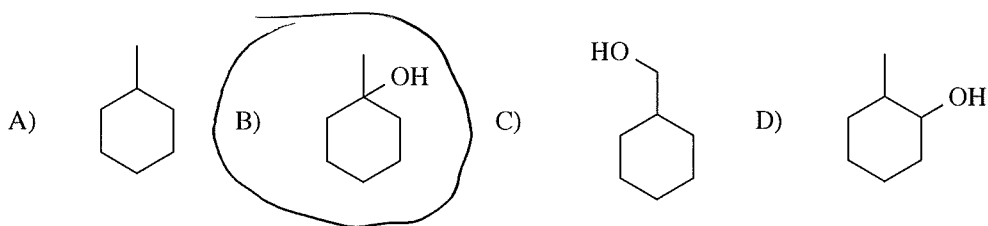
7. Which of the following **alkenes** yields the product shown in the box upon treatment with **Cl₂/H₂O**?



8. What is the **main product** of the reaction shown in the box?



9. Which of the following depicts the major product of the acid catalyzed **hydration** of **methylenecyclohexane**?



10. Which of the following is an important **intermediate** of the reaction shown in the box?

